


NAME: _____

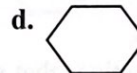




MINUTE 2



1. If you flip a coin 10 times, how many times will it land on heads?
 a. 10 b. 5 c. 2 d. impossible to tell

2. Which shape is a pentagon?




3. Write the fraction for each:

Two-fifths = _____

Three-fourths = _____

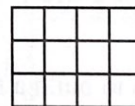
4. Write the fraction that represents the shaded boxes. _____



5. $3 \times 4 + 4 =$

6. Complete the pattern: 4, 8, 12, 16, _____.

7. What is the perimeter (distance around) of the rectangle to the right? _____.




8. According to the graph to the right:

A = _____

B = _____

C = _____



9. $8 \cdot 6 =$ $8 \cdot 4 =$ $8 \cdot 7 =$

10. $\frac{24}{6} =$ $\frac{36}{6} =$ $\frac{18}{6} =$