

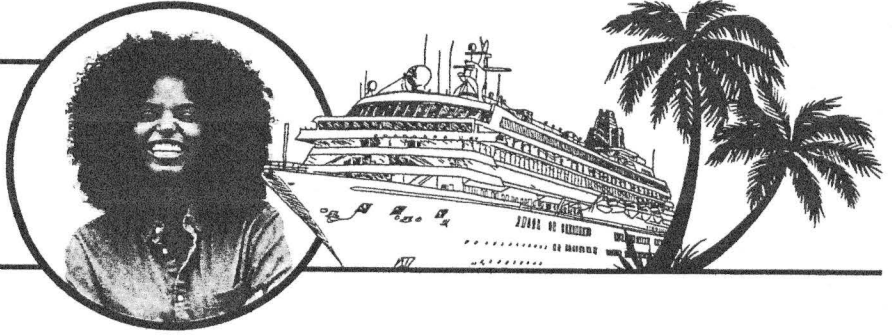
Name _____

Laister

Period 3 Credit Recovery

Week 5 DL

Zoey's Vacation Budget



Zoey has been saving up for four years to take a Caribbean cruise vacation.

She plans to be gone for 12 days. Her cruise will last seven days and she will spend five days in Florida.

Zoey saved \$4,648.00. She made a budget for her vacation so she wouldn't overspend.

Caribbean Vacation Budget

Budget Total: \$4,648.00

Budgeted Expenses	
Category	Amount
Cruise	\$1,400.00
Airfare	\$250.00
Hotels	\$500.00
Dining Out	\$400.00
New Clothes	\$580.00
Gifts	\$265.00
Activities	\$645.00
Car Rental	\$350.00
Miscellaneous	\$200.00



1. What is the total of budgeted expenses for Zoey's vacation?

2. On average, how much did she save each year to reach her savings total of \$4,648.00?

Name _____

ZOEY'S VACATION BUDGET

Below is the pricing for a 7-day Caribbean cruise. The ship leaves from Miami. Then sails to St. Thomas, Tortola, Nassau, and back to Miami.

Zoey must decide what dates to book her cruise and what kind of cabin she would like.



Cabin Pricing

Cabin	October 14 to 21	November 17 to 24
Studio Inside (solo guests only)	\$849.00	\$1,029.00
Ocean view	\$999.00	\$1,219.00
Balcony	\$1,079.00	\$1,349.00
Spa Cabin	\$1,599.00	\$1,879.00
Mini-Suite	\$1,179.00	\$1,499.00
Luxury Suite	\$2,899.00	\$3,799.00

1. Zoey is trying to decide between an Ocean View cabin and a Mini-Suite.

During November, how much more is a Mini-Suite than an Ocean View cabin?

2. She would like to take her vacation in November. It costs more to travel then because of the Thanksgiving holiday.

How much would she save on an Ocean View suite if she traveled in October?

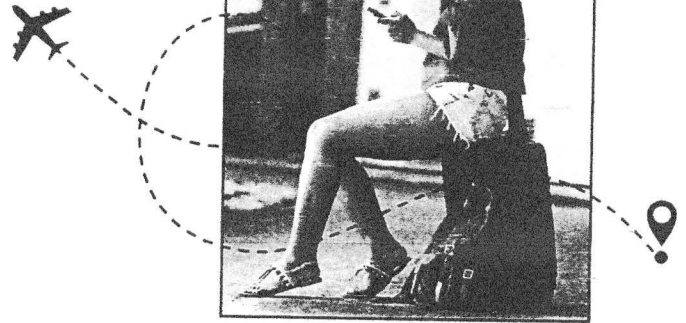
How much would she save on a Mini-Suite?

Name _____

ZOEY'S VACATION BUDGET

Zoey will be flying from Chicago to Miami. After her cruise, she will stay in Miami a couple of days and then rent a car and drive down to Key West.

She will stay in Key West three nights then drive back to Miami and fly home. She is looking at airfares and hotel costs for her time in Florida.



Roundtrip Airfare Options: Chicago to Miami

LEAVE OCT. 14 RETURN OCT. 26			LEAVE NOV. 17 RETURN NOV. 29		
Airline	Stops	Price	Airline	Stops	Price
Delta	1-stop	\$200.00	Delta	1-stop	\$356.00
United	nonstop	\$147.00	United	nonstop	\$228.00
American	nonstop	\$208.00	American	nonstop	\$389.00

Hotel Options

MIAMI	
Hotel	Price Per Night
Best Western Airport	\$82.00
Holiday Inn	\$111.00
Fortune House Hotel	\$152.00

KEY WEST	
Hotel	Price Per Night
Sheraton Suites	\$158.00
24 North Hotel	\$127.00
Gates Hotel	\$135.00

1. Airfare is also higher during November. If she travels on Delta, how much more will she spend in November than October?

If she travels on American, how much more will she spend?

2. How much more will it cost to spend two nights at the Fortune House Hotel than the Best Western in Miami?

3. What would it cost to spend three nights at the Gates Hotel in Key West?

Use information from pages 20 and 21 to answer these questions about Zoey's vacation budget.

1. Zoey decided to travel in November. She really wanted to spend Thanksgiving on the cruise ship. She ended up getting a great deal on a Spa Cabin. She saved 20% off the November price.

How much did she pay for the cruise? _____

How much over her budgeted amount was she? _____

2. Zoey and two friends went scuba diving when they went ashore on St. Thomas. It cost \$179.00 to rent scuba gear and \$375.00 to rent a boat and a scuba guide.

Besides the cost of her gear, Zoey paid $\frac{1}{3}$ of the cost for the boat and guide. How much did her diving trip cost? _____

How much of her activities budget was left after this trip? _____

3. When Zoey was on the ship she didn't spend anything extra for food. But when she was onshore she bought lunch. She spent \$28.45 in St. Thomas, \$26.99 in Tortola, and \$35.14 in Nassau.

How much did she spend on lunches? _____

How much of her dining out budget did she have left to spend when she got back to Florida? _____

4. When Zoey was on the ship she went to the spa. She got a massage for \$145.00 and a facial for \$138.00. She used the amount she had budgeted for miscellaneous to cover part of the cost. The rest she deducted from her activities budget.

How much was left in her activities budget after this expense? _____

Name _____

ZOEY'S VACATION BUDGET

Zoey kept track of all the money she spent on her vacation. Compare Zoey's budget with the actual amount of money she spent.




Figure the difference in the amounts.

Write a plus (+) or minus (–) after the difference to show if she went over or under her budget in each category. The first one is done for you.

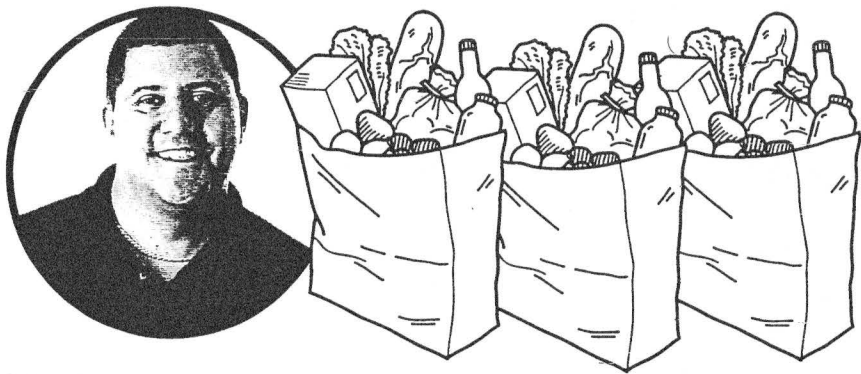
Category	Budgeted Amount	Actual Money Spent	Difference	+ or –
Cruise	\$1,400.00	\$1,503.00	\$103.00	+
Airfare	\$250.00	\$228.00		
Hotels	\$500.00	\$545.00		
Dining Out	\$400.00	\$389.00		
New Clothes	\$580.00	\$624.00		
Gifts	\$265.00	\$189.00		
Activities	\$645.00	\$659.00		
Car Rental	\$350.00	\$297.00		
Miscellaneous	\$200.00	\$248.00		
Total Budgeted:		Total Spent:		

- How do you think Zoey did on her vacation? Did she spend more than she budgeted? Did she spend more than she saved? Do you think Zoey would have spent more or less if she hadn't made a budget? Explain your answers.

Name _____

STAYING ON BUDGET
Manuel's Grocery Budget

Manuel just created a new monthly budget. The amount he budgeted for groceries is \$840.00. Help Manuel stay on budget by answering the questions.



- 1. In a 30-day month, what is his daily budget for groceries?

- 2. Manuel is shopping for one week's groceries today. How much does he have to spend if he stays within budget?

- 3. One-eighth of the money he's spending today goes towards cleaning supplies.
How much does he have to spend?

How much is left for food?

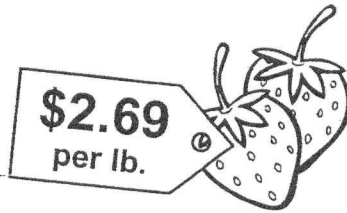

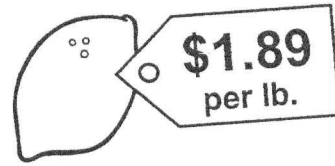




- 4. Look at the products above. After buying laundry soap, list three other cleaning products Manuel can afford to buy and stay on budget.

Name _____

STAYING ON BUDGET Manuel's Grocery Budget

Use information from page 46 to answer these questions and help Manuel stay within his grocery budget.



Manuel loves fresh fruit. He bought five pounds of bananas, four pounds of lemons, three pears, and six pounds of strawberries.

What did he spend on fresh fruit?

How much is left of the food part of the budget?

After buying bread, eggs, milk, crackers, cheese, and pasta, Manuel has \$113.19 left to spend on food.

What did he spend on these items?

Manuel does not want to spend more than $\frac{1}{3}$ of what is left of the food budget on steak, fish, and sausage.

How much does he have to spend?

How many pounds of each of the items shown below can he afford to buy?

